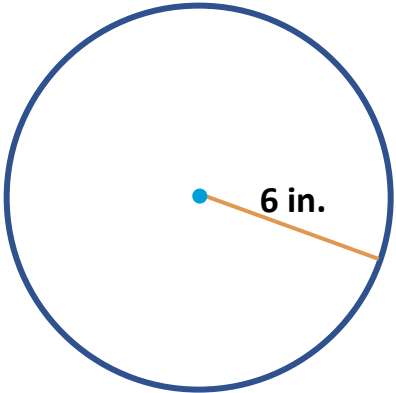
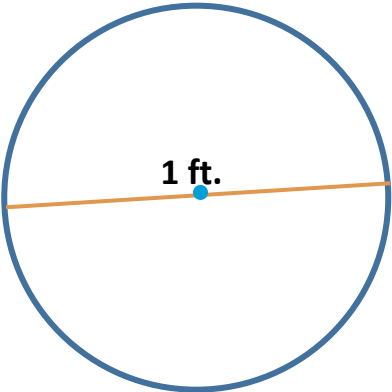
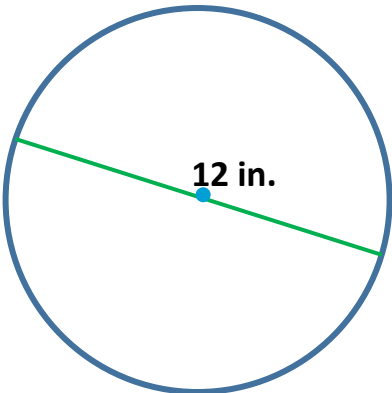
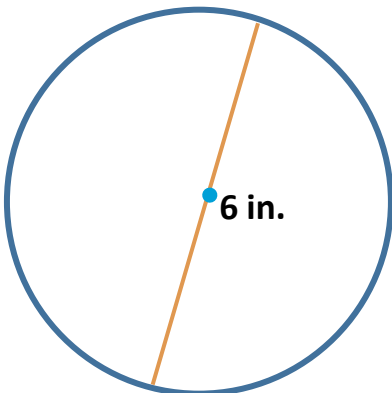


Warm Up

5/15/23

Which one doesn't belong?

<p>A</p>  <p>A circle with a center point. A blue radius line segment extends from the center to the circumference, labeled "6 in."</p>	<p>B</p>  <p>A circle with a center point. A blue diameter line segment passes through the center, connecting two points on the circumference, labeled "1 ft."</p>
<p>C</p>  <p>A circle with a center point. A green diameter line segment passes through the center, connecting two points on the circumference, labeled "12 in."</p>	<p>D</p>  <p>A circle with a center point. A blue radius line segment extends from the center to the circumference, labeled "6 in."</p>