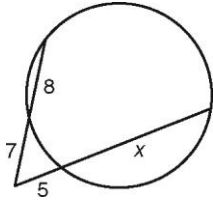
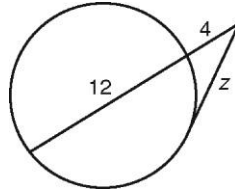


Module 15.4-15.5 classwork

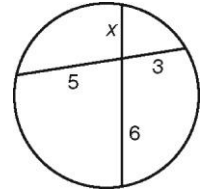
1. Find x .



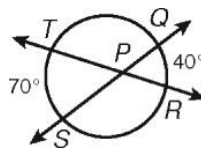
2. Find z .



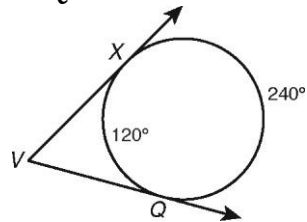
3. Find x .



4. Find $m\angle QPR$



5. Find $m\angle XVQ$



6. Find x .

